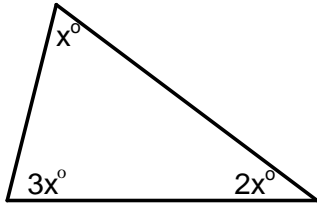


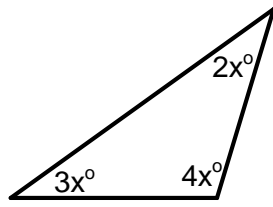
Forming & Solving Equations involving Angles



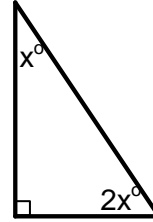
Section A



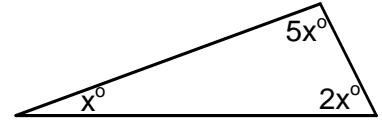
Smallest angle: _____
Largest angle: _____



Smallest angle: _____
Largest angle: _____

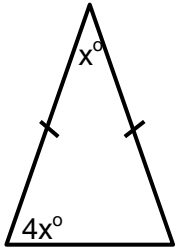


Smallest angle: _____
Largest angle: _____

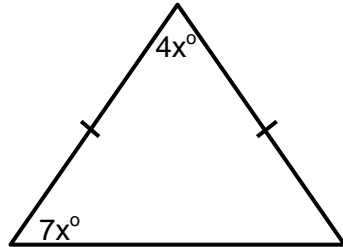


Smallest angle: _____
Largest angle: _____

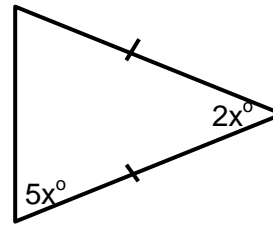
Section B



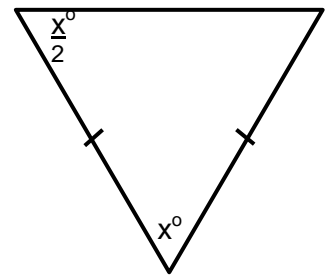
Smallest angle: _____
Largest angle: _____



Smallest angle: _____
Largest angle: _____

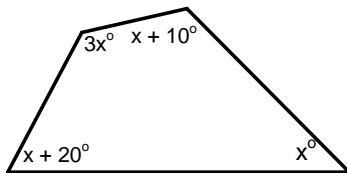


Smallest angle: _____
Largest angle: _____

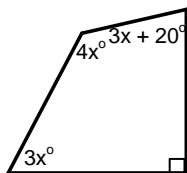


Smallest angle: _____
Largest angle: _____

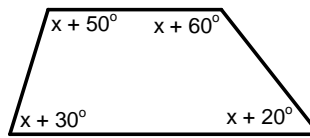
Section C



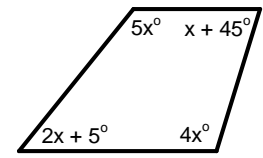
Smallest angle: _____
Largest angle: _____



Smallest angle: _____
Largest angle: _____

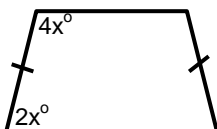


Smallest angle: _____
Largest angle: _____

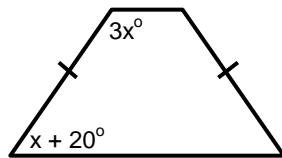


Smallest angle: _____
Largest angle: _____

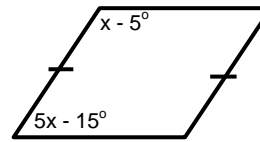
Section D



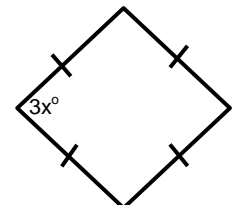
Smallest angle: _____
Largest angle: _____



Smallest angle: _____
Largest angle: _____



Smallest angle: _____
Largest angle: _____



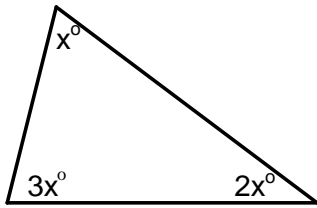
Smallest angle: _____
Largest angle: _____

Forming & Solving Equations involving Angles

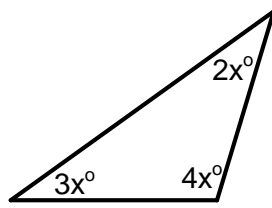


ANSWERS

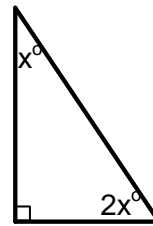
Section A



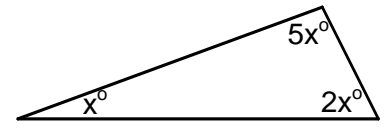
Smallest angle: 30°
Largest angle: 90°



Smallest angle: 40°
Largest angle: 80°

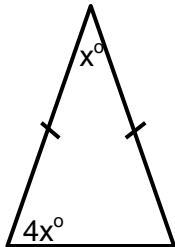


Smallest angle: 30°
Largest angle: 90°

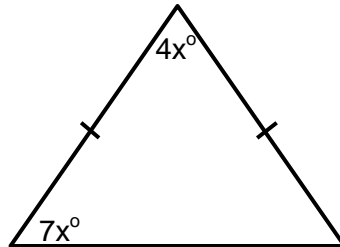


Smallest angle: 22.5°
Largest angle: 112.5°

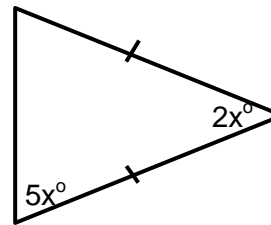
Section B



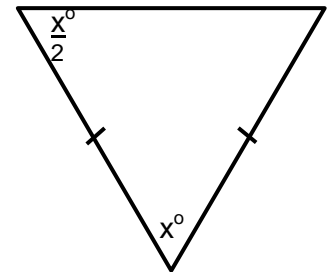
Smallest angle: 20°
Largest angle: 80°



Smallest angle: 40°
Largest angle: 70°

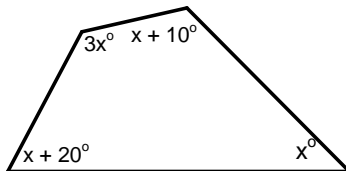


Smallest angle: 30°
Largest angle: 75°

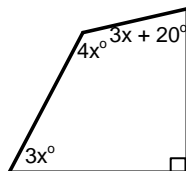


Smallest angle: 45°
Largest angle: 90°

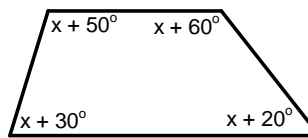
Section C



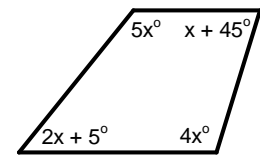
Smallest angle: 55°
Largest angle: 165°



Smallest angle: 75°
Largest angle: 100°

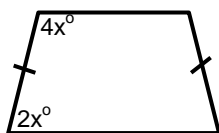


Smallest angle: 70°
Largest angle: 110°

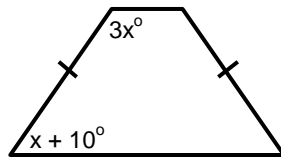


Smallest angle: 70.8°
Largest angle: 129.3°

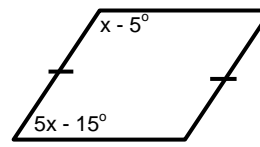
Section D



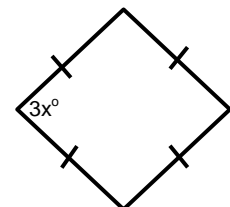
Smallest angle: 60°
Largest angle: 120°



Smallest angle: 52.5°
Largest angle: 127.5°



Smallest angle: 28.3°
Largest angle: 151.7°



Smallest angle: 90°
Largest angle: 90°